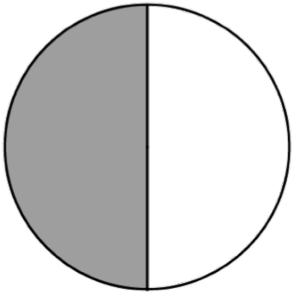


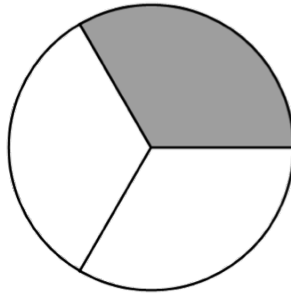
Question

Trina makes a blueberry pie and cuts it into sixths. She gives two-sixths away to the neighbors. Which picture below shows the equivalent fraction to two-sixths?

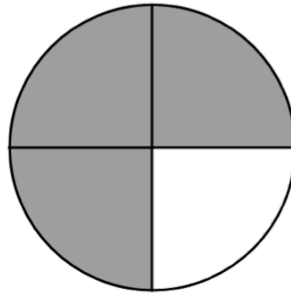
A



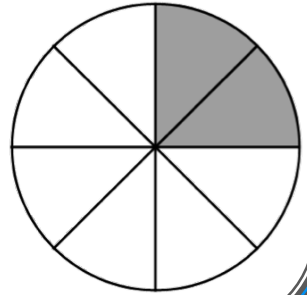
B



C



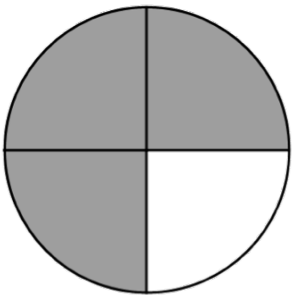
D



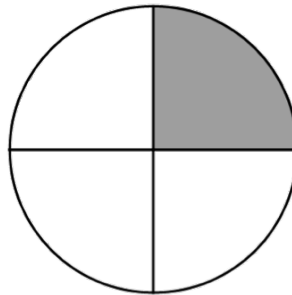
Question

Henry orders a pizza with eight slices and asks for six of the slices to be pepperoni. Which picture below shows the equivalent fraction to six-eighths?

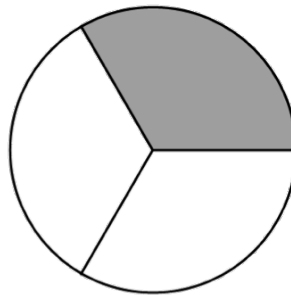
A



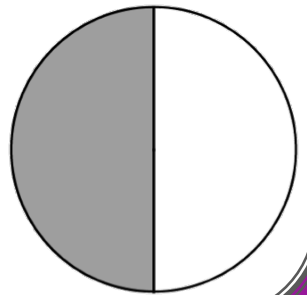
B



C



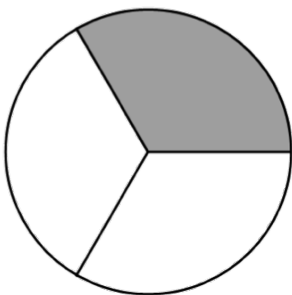
D



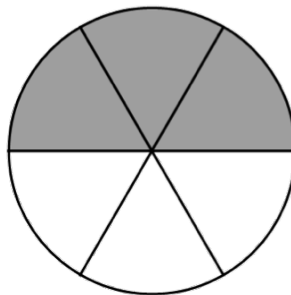
Question

Mrs. Balkey cuts a round of cheese into fourths for a party. Her guests eat three-fourths of the cheese. Which picture below shows the equivalent fraction to three-fourths?

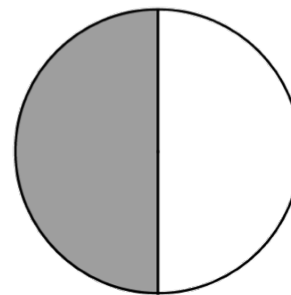
A



B



C



D

