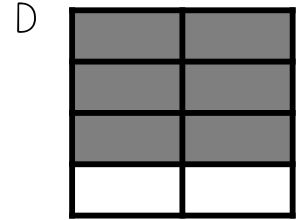
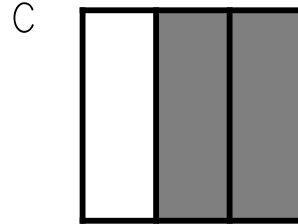





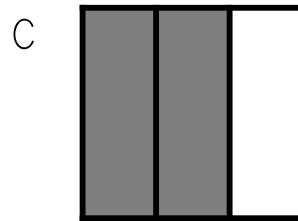


Question

John gives away one-half of his sandwich at lunch. Which picture below shows the equivalent fraction to one-half?



Question

Sean divides his candy bar into sixths. He gives away four-sixths of his candy bar to friends. Which picture below shows the equivalent fraction to four-sixths?



Question

Olivia cuts a pan of brownies into thirds. She puts sprinkles on top of one-third of the brownies. Which picture below shows the equivalent fraction to one-third?

