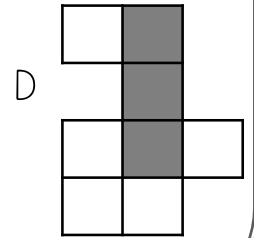
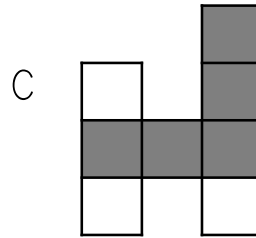
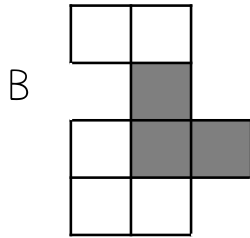
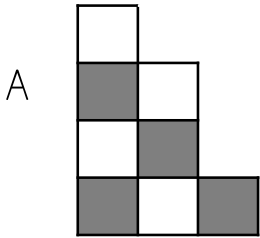


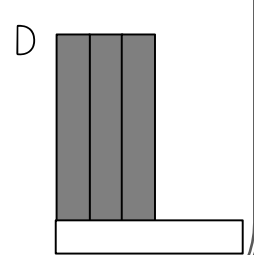
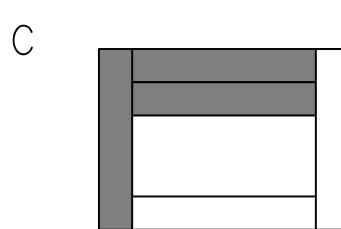
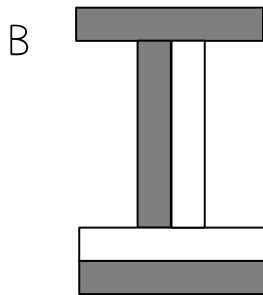
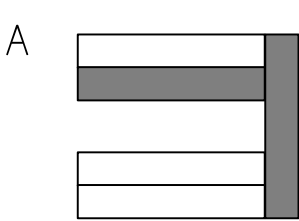
Question

Jan arranges her blocks in different ways mixing gray blocks and white blocks. Which of the following arrangements of blocks have an equal fraction of gray blocks?



Question

Chad arranges his light and dark markers in different ways. Which of the following arrangements of markers have an equal fraction of light markers?



Question

Allen has gray and white golf balls. He like to arrange them in different ways. Which of the following arrangements of golf balls have an equal fraction of gray golf balls?

